




**WORKSHEET POINT**


[www.worksheetpoint.com](http://www.worksheetpoint.com)

**Count the apples in each box.**


**Match with correct number**




**2**




**5**



**4**



**6**



**3**



WORKSHEET POINT

www.woeksheetpoint.com

Count the Perrots in each box.

Match with correct number




3



1



4



7



5



**WORKSHEET POINT**

[www.worksheetpoint.com](http://www.worksheetpoint.com)

## Write missing numbers 1 to 10

1)

1	2	3		5	6		8
---	---	---	--	---	---	--	---

2)

2	3	4		6		8	9
---	---	---	--	---	--	---	---

3)

1		3	4	6	7	
---	--	---	---	---	---	--

4)

3		5	6		8	9	
---	--	---	---	--	---	---	--

5)

1	2		4	5		7	
---	---	--	---	---	--	---	--

6)

3	4	5		7	8		10
---	---	---	--	---	---	--	----



**WORKSHEET POINT**

[www.worksheetpoint.com](http://www.worksheetpoint.com)

## Write missing numbers 11 to 20

1)

11	12	13		15	16		18
----	----	----	--	----	----	--	----

2)

12	13	14		16		18	19
----	----	----	--	----	--	----	----

3)

11		13	14	16	17	
----	--	----	----	----	----	--

4)

13		15	16		18	19	
----	--	----	----	--	----	----	--

5)

11	12		14	15		17	
----	----	--	----	----	--	----	--

6)

13	14	15		17	18		20
----	----	----	--	----	----	--	----



**WORKSHEET POINT**

[www.worksheetpoint.com](http://www.worksheetpoint.com)

## Write missing numbers 21 to 30

1)

<b>21</b>	<b>22</b>	<b>23</b>		<b>25</b>	<b>26</b>		<b>28</b>
-----------	-----------	-----------	--	-----------	-----------	--	-----------

2)

<b>22</b>	<b>23</b>	<b>24</b>		<b>26</b>		<b>28</b>	<b>29</b>
-----------	-----------	-----------	--	-----------	--	-----------	-----------

3)

<b>21</b>		<b>23</b>	<b>24</b>	<b>26</b>	<b>27</b>	
-----------	--	-----------	-----------	-----------	-----------	--

4)

<b>23</b>		<b>25</b>	<b>26</b>		<b>28</b>	<b>29</b>	
-----------	--	-----------	-----------	--	-----------	-----------	--

5)

<b>21</b>	<b>22</b>		<b>24</b>	<b>25</b>		<b>27</b>	
-----------	-----------	--	-----------	-----------	--	-----------	--

6)

<b>23</b>	<b>24</b>	<b>25</b>		<b>27</b>	<b>28</b>		<b>30</b>
-----------	-----------	-----------	--	-----------	-----------	--	-----------



**WORKSHEET POINT**

[www.worksheetpoint.com](http://www.worksheetpoint.com)

## Write missing numbers 31 to 40

1)

<b>31</b>	<b>32</b>	<b>33</b>		<b>35</b>	<b>36</b>		<b>38</b>
-----------	-----------	-----------	--	-----------	-----------	--	-----------

2)

<b>32</b>	<b>33</b>	<b>34</b>		<b>36</b>		<b>38</b>	<b>39</b>
-----------	-----------	-----------	--	-----------	--	-----------	-----------

3)

<b>31</b>		<b>33</b>	<b>34</b>	<b>36</b>	<b>37</b>	
-----------	--	-----------	-----------	-----------	-----------	--

4)

<b>33</b>		<b>35</b>	<b>36</b>		<b>38</b>	<b>39</b>	
-----------	--	-----------	-----------	--	-----------	-----------	--

5)

<b>31</b>	<b>32</b>		<b>34</b>	<b>35</b>		<b>37</b>	
-----------	-----------	--	-----------	-----------	--	-----------	--

6)

<b>33</b>	<b>34</b>	<b>35</b>		<b>37</b>	<b>38</b>		<b>40</b>
-----------	-----------	-----------	--	-----------	-----------	--	-----------



**WORKSHEET POINT**

[www.worksheetpoint.com](http://www.worksheetpoint.com)

## Write missing numbers 41 to 50

1)

41	42	43		45	46		48
----	----	----	--	----	----	--	----

2)

42	43	44		46		48	49
----	----	----	--	----	--	----	----

3)

41		43	44	46	47	
----	--	----	----	----	----	--

4)

43		45	46		48	49	
----	--	----	----	--	----	----	--

5)

41	42		44	45		47	
----	----	--	----	----	--	----	--

6)

43	44	45		47	48		50
----	----	----	--	----	----	--	----



**WORKSHEET POINT**

[www.worksheetpoint.com](http://www.worksheetpoint.com)

## Write missing numbers 51 to 60

1)

51	52	53		55	56		58
----	----	----	--	----	----	--	----

2)

52	53	54		56		58	59
----	----	----	--	----	--	----	----

3)

51		53	54	56	57	
----	--	----	----	----	----	--

4)

53		55	56		58	59	
----	--	----	----	--	----	----	--

5)

51	52		54	55		57	
----	----	--	----	----	--	----	--

6)

53	54	55		57	58		60
----	----	----	--	----	----	--	----





**WORKSHEET POINT**

[www.worksheetpoint.com](http://www.worksheetpoint.com)

## Write missing numbers 61 to 70

1)

<b>61</b>	<b>62</b>	<b>63</b>		<b>65</b>	<b>66</b>		<b>68</b>
-----------	-----------	-----------	--	-----------	-----------	--	-----------

2)

<b>62</b>	<b>63</b>	<b>64</b>		<b>66</b>		<b>68</b>	<b>69</b>
-----------	-----------	-----------	--	-----------	--	-----------	-----------

3)

<b>61</b>		<b>63</b>	<b>64</b>	<b>66</b>	<b>67</b>	
-----------	--	-----------	-----------	-----------	-----------	--

4)

<b>63</b>		<b>65</b>	<b>66</b>		<b>68</b>	<b>69</b>	
-----------	--	-----------	-----------	--	-----------	-----------	--

5)

<b>61</b>	<b>62</b>		<b>64</b>	<b>65</b>		<b>67</b>	
-----------	-----------	--	-----------	-----------	--	-----------	--

6)

<b>63</b>	<b>64</b>	<b>65</b>		<b>67</b>	<b>68</b>		<b>70</b>
-----------	-----------	-----------	--	-----------	-----------	--	-----------



**WORKSHEET POINT**

[www.worksheetpoint.com](http://www.worksheetpoint.com)

## Write missing numbers 71 to 80

1)

71	72	73		75	76		78
----	----	----	--	----	----	--	----

2)

72	73	74		76		78	79
----	----	----	--	----	--	----	----

3)

71		73	74	76	77	
----	--	----	----	----	----	--

4)

73		75	76		78	79	
----	--	----	----	--	----	----	--

5)

71	72		74	75		77	
----	----	--	----	----	--	----	--

6)

73	74	75		77	78		80
----	----	----	--	----	----	--	----



**WORKSHEET POINT**

[www.worksheetpoint.com](http://www.worksheetpoint.com)

## Write missing numbers 81 to 90

1)

<b>81</b>	<b>82</b>	<b>83</b>		<b>85</b>	<b>86</b>		<b>88</b>
-----------	-----------	-----------	--	-----------	-----------	--	-----------

2)

<b>82</b>	<b>83</b>	<b>84</b>		<b>86</b>		<b>88</b>	<b>89</b>
-----------	-----------	-----------	--	-----------	--	-----------	-----------

3)

<b>81</b>		<b>83</b>	<b>84</b>	<b>86</b>	<b>87</b>	
-----------	--	-----------	-----------	-----------	-----------	--

4)

<b>83</b>		<b>85</b>	<b>86</b>		<b>88</b>	<b>89</b>	
-----------	--	-----------	-----------	--	-----------	-----------	--

5)

<b>81</b>	<b>82</b>		<b>84</b>	<b>85</b>		<b>87</b>	
-----------	-----------	--	-----------	-----------	--	-----------	--

6)

<b>83</b>	<b>84</b>	<b>85</b>		<b>87</b>	<b>88</b>		<b>90</b>
-----------	-----------	-----------	--	-----------	-----------	--	-----------



**WORKSHEET POINT**

[www.worksheetpoint.com](http://www.worksheetpoint.com)

## Write missing numbers 91 to 100

1)

<b>91</b>	<b>92</b>	<b>93</b>		<b>95</b>	<b>96</b>		<b>98</b>
-----------	-----------	-----------	--	-----------	-----------	--	-----------

2)

<b>92</b>	<b>93</b>	<b>94</b>		<b>96</b>		<b>98</b>	<b>99</b>
-----------	-----------	-----------	--	-----------	--	-----------	-----------

3)

<b>91</b>		<b>93</b>	<b>94</b>	<b>96</b>	<b>97</b>	
-----------	--	-----------	-----------	-----------	-----------	--

4)

<b>93</b>		<b>95</b>	<b>96</b>		<b>98</b>	<b>99</b>	
-----------	--	-----------	-----------	--	-----------	-----------	--

5)

<b>91</b>	<b>92</b>		<b>94</b>	<b>95</b>		<b>97</b>	
-----------	-----------	--	-----------	-----------	--	-----------	--

6)

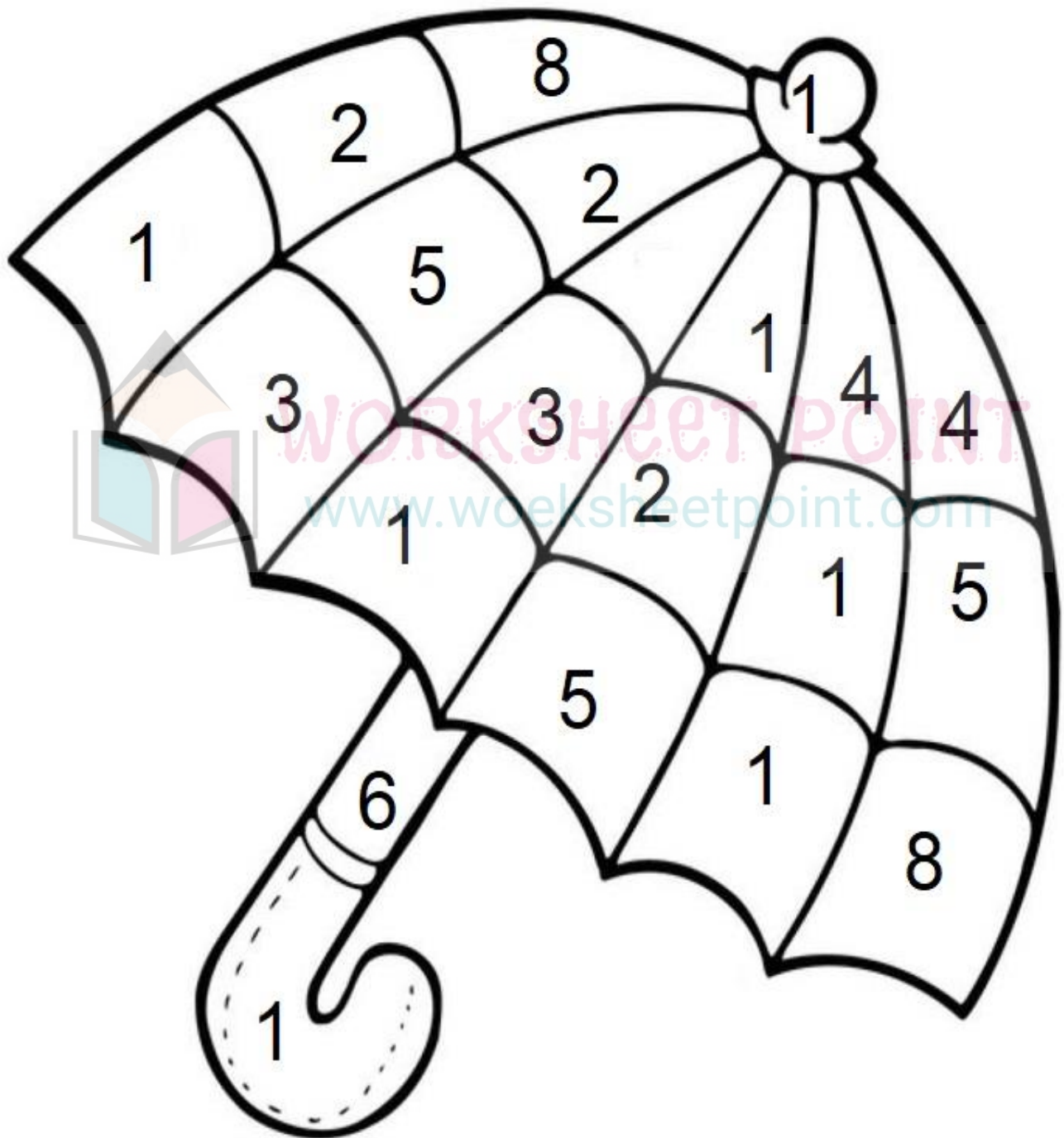
<b>93</b>	<b>94</b>	<b>95</b>		<b>97</b>	<b>98</b>		<b>100</b>
-----------	-----------	-----------	--	-----------	-----------	--	------------



WORKSHEET POINT

www.worksheetpoint.com

# Find and Colour the Number "1"

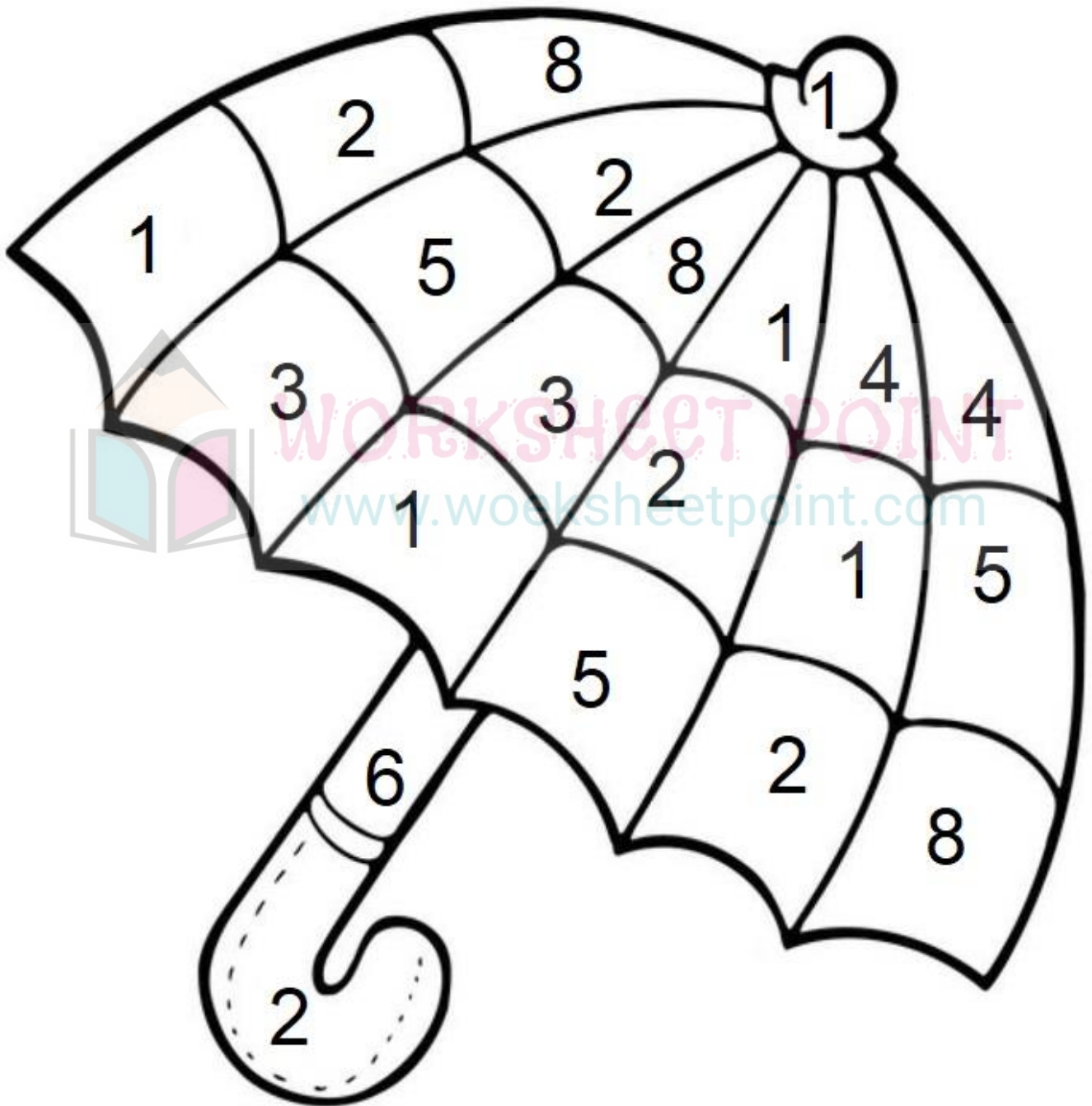




WORKSHEET POINT

www.woeksheetpoint.com

# Find and Colour the Number "2"

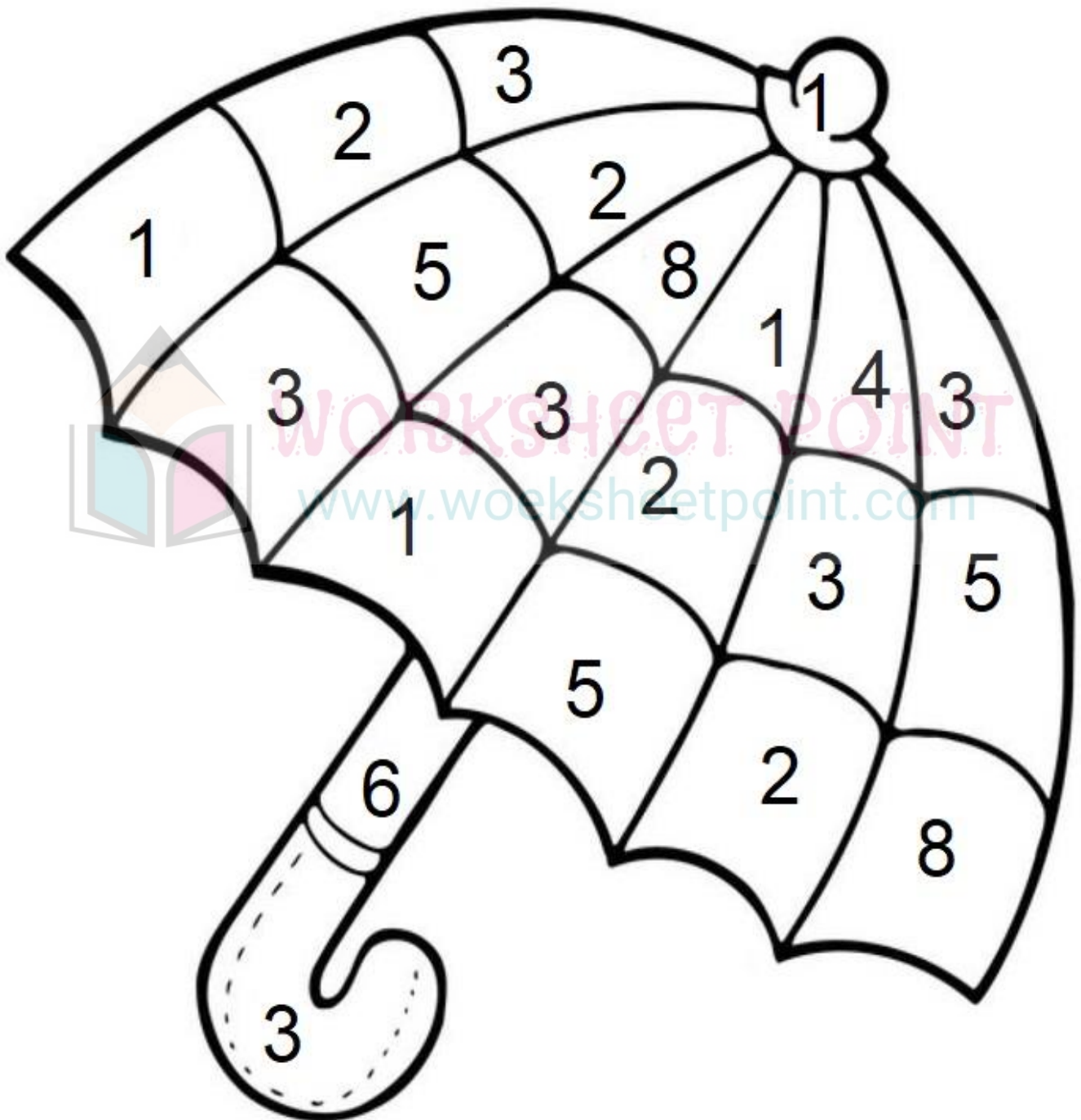




WORKSHEET POINT

www.worksheetpoint.com

# Find and Colour the Number "3"

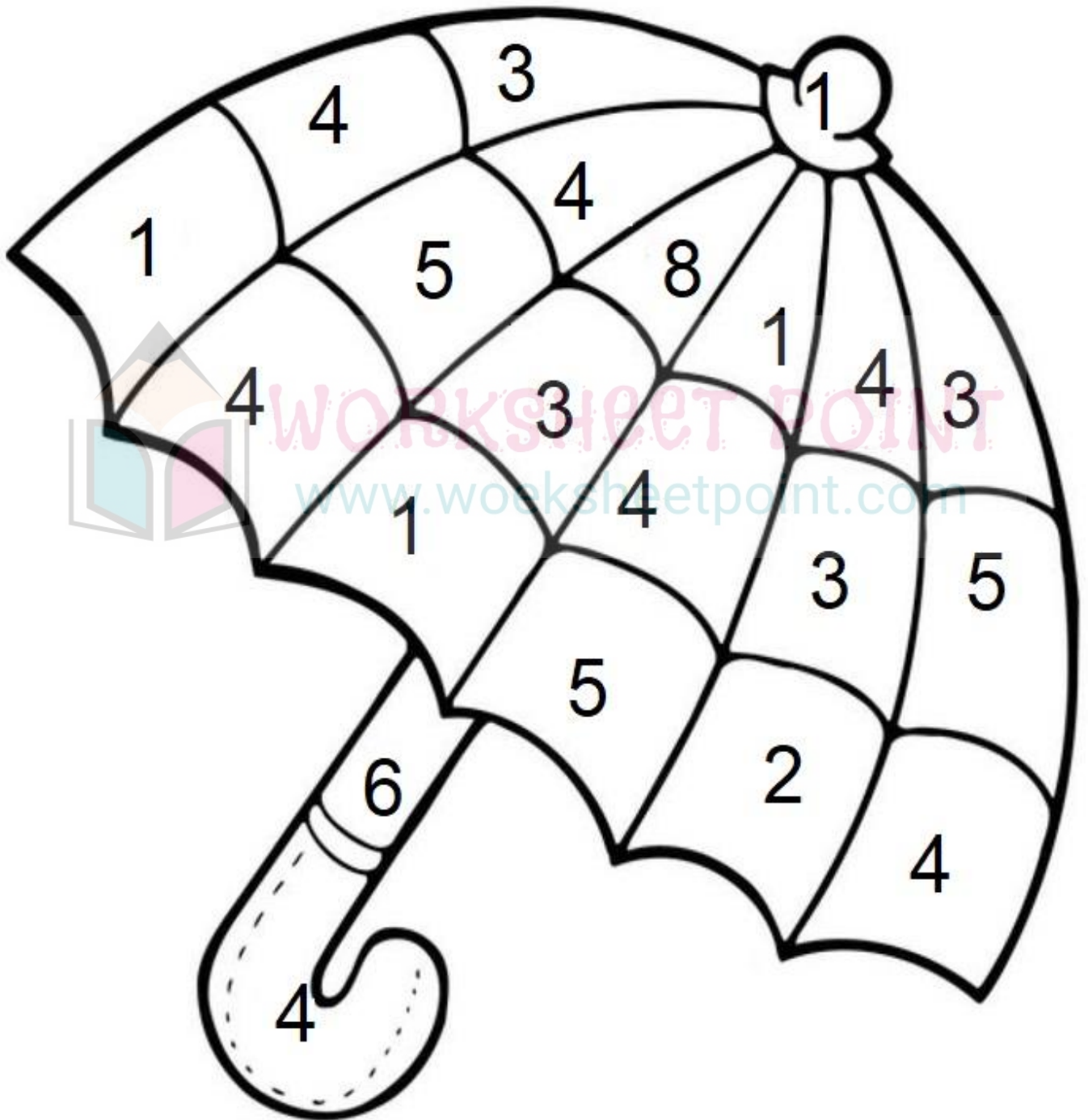




WORKSHEET POINT

www.woeksheetpoint.com

# Find and Colour the Number "4"



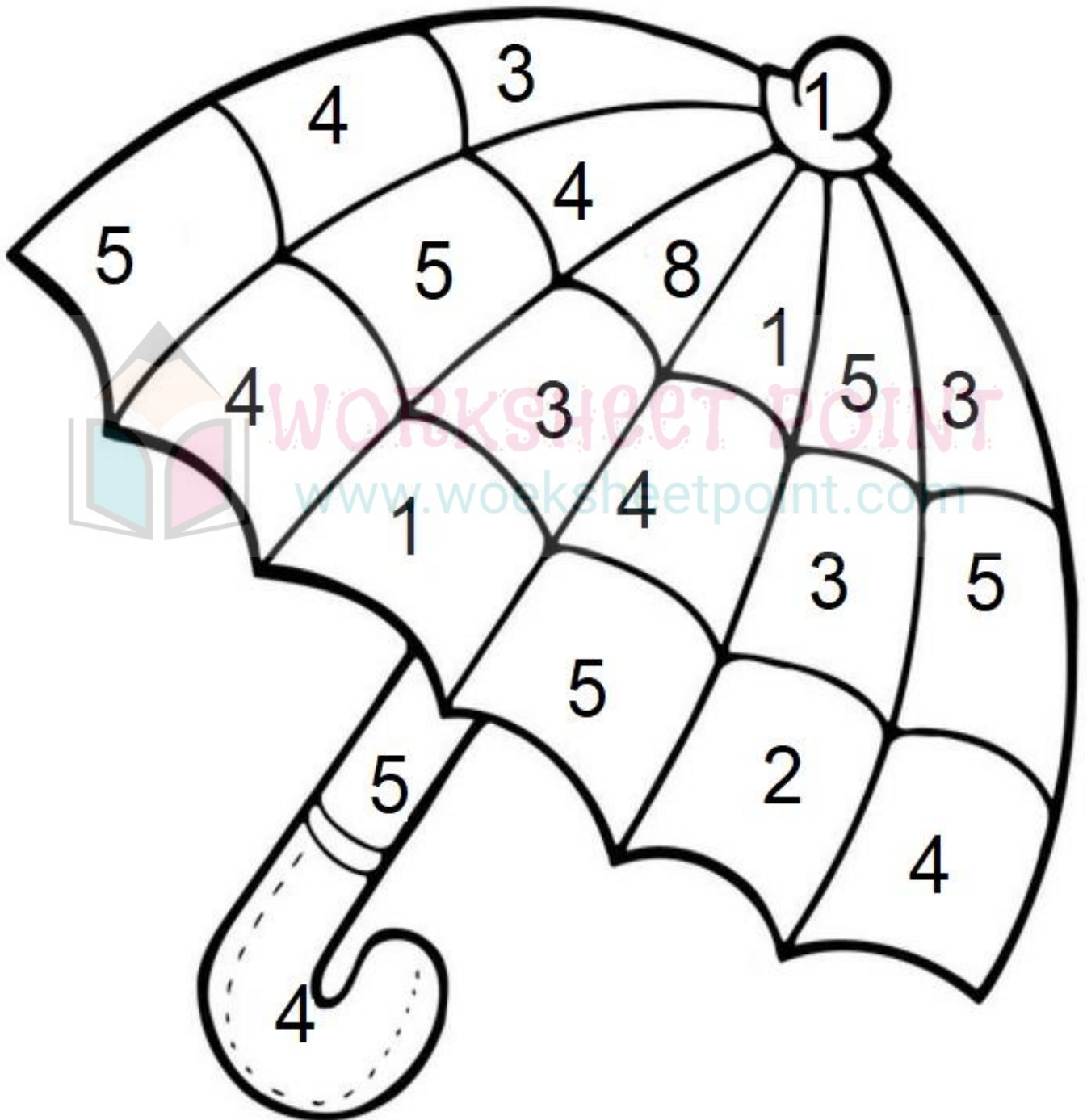




WORKSHEET POINT

www.woeksheetpoint.com

# Find and Colour the Number "5"

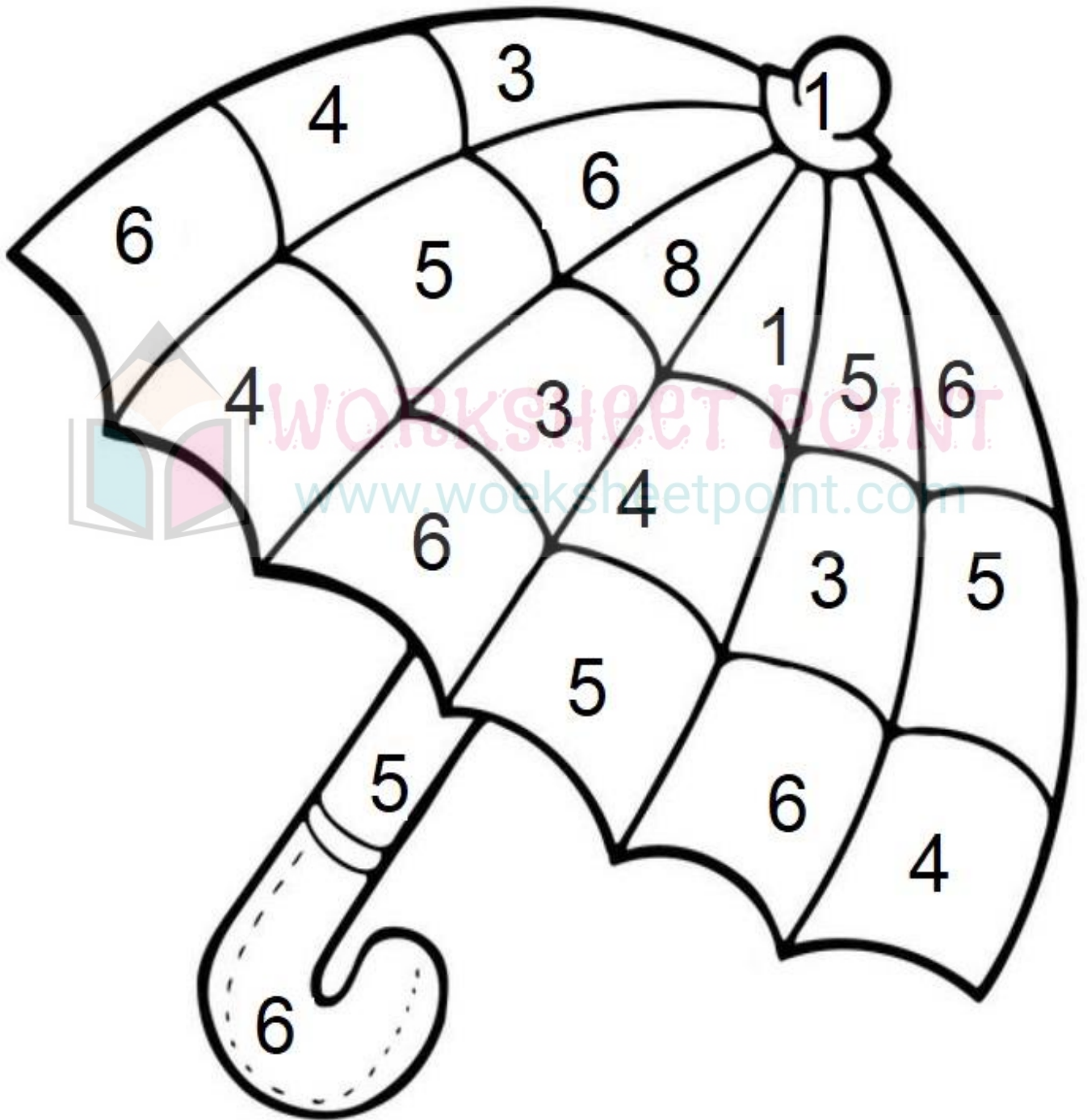




WORKSHEET POINT

www.woeksheetpoint.com

# Find and Colour the Number "6"

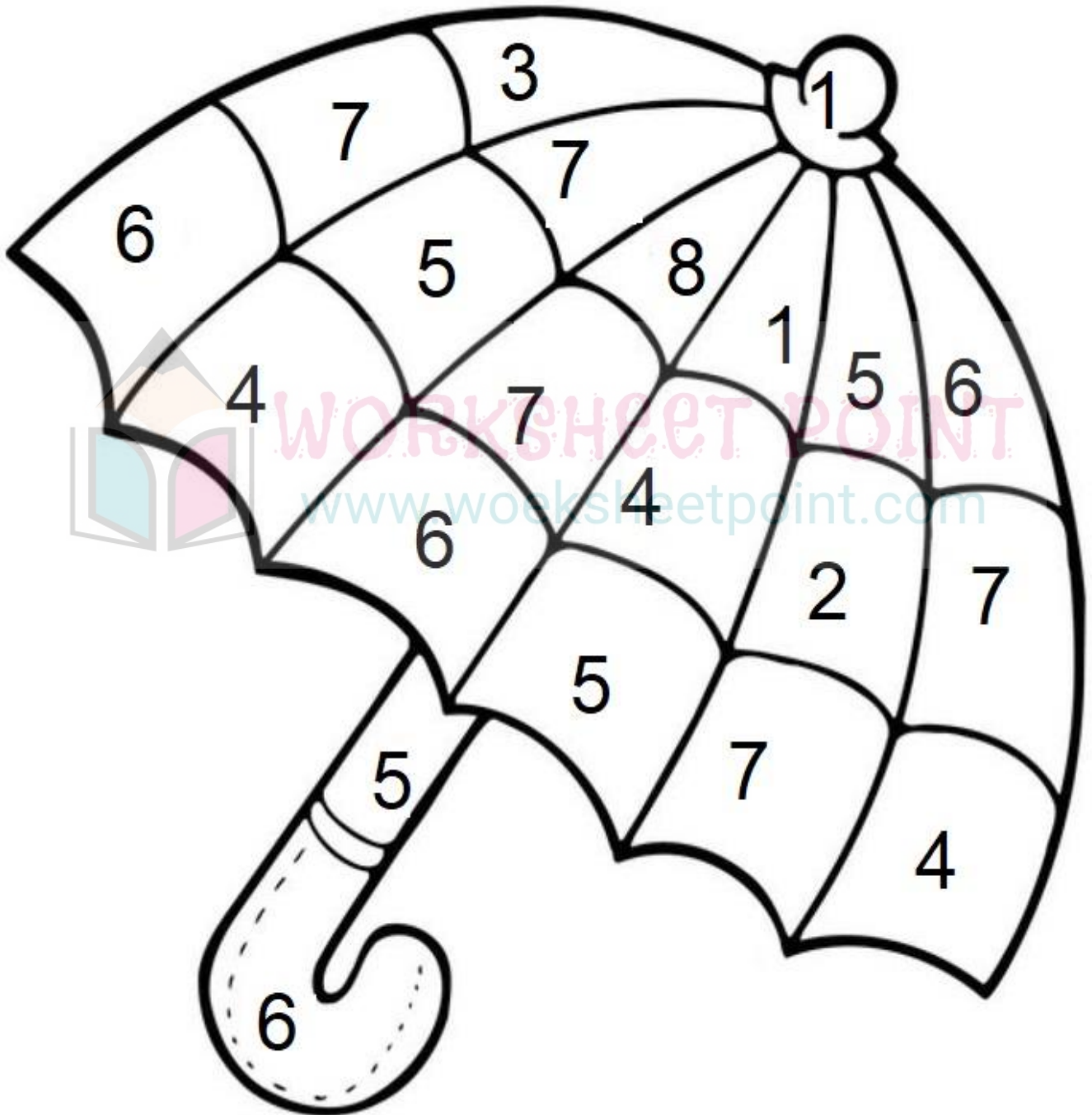




WORKSHEET POINT

www.worksheetpoint.com

# Find and Colour the Number "7"

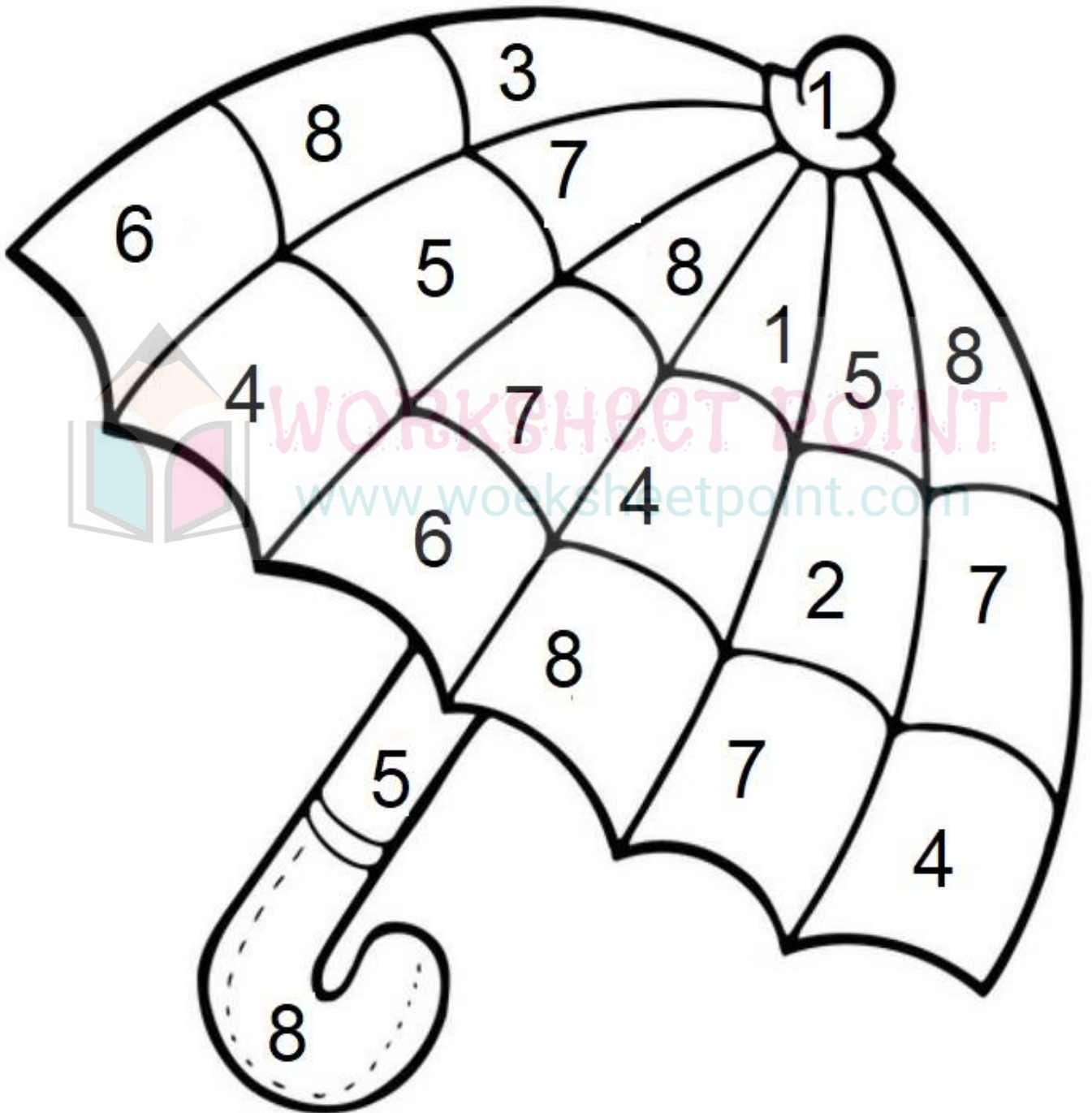




WORKSHEET POINT

www.worksheetpoint.com

# Find and Colour the Number "8"





WORKSHEET POINT

www.worksheetpoint.com

# Find and Colour the Number "9"

